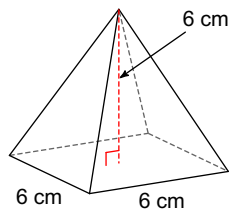


Homework #4 Square Pyramids and Spheres

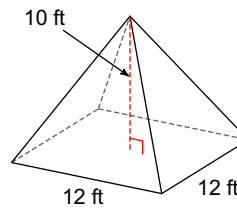
Due Date _____ 5A _____

Calculate the surface area and the volume. Round to the nearest tenth.

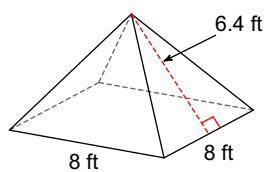
1)



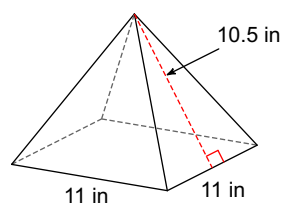
2)



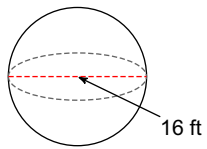
3)



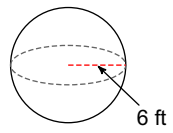
4)



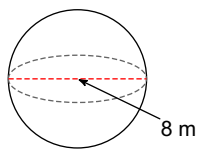
5)



6)



7)



8)

